


45

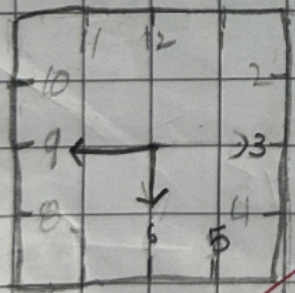
Q 3. Draw the clock hands Quarter to

a. Quarter to 12



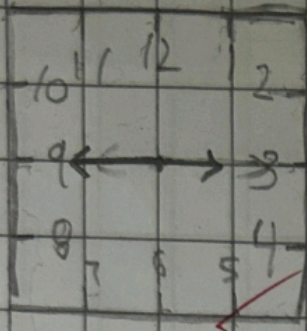
= 11 : 45

b. Quarter to 6



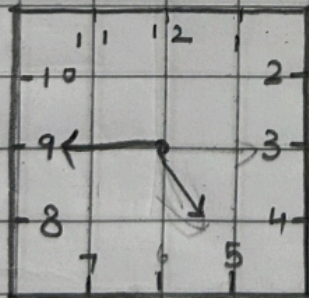
= 5 : 45

c. Quarter to 3

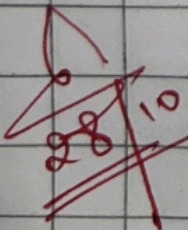


= 2 : 45

d. Quarter to 5



= 4 : 45



28/10/24

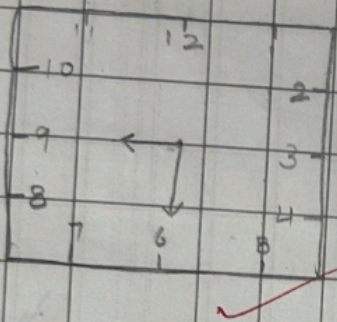
35

Time

C.W

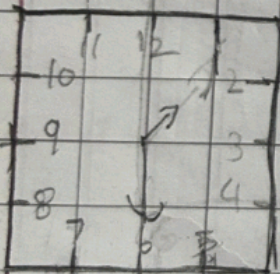
Q1. Draw the clock hands half past (30)

a. Half past 9



= 9 : 30

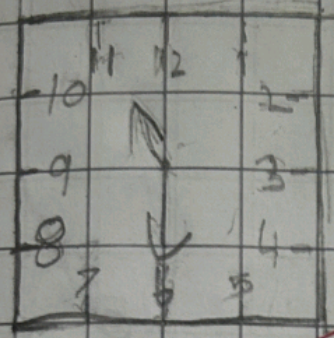
b. Half past 1



1 : 30

d.

Half past 11



11:30

Half past 5

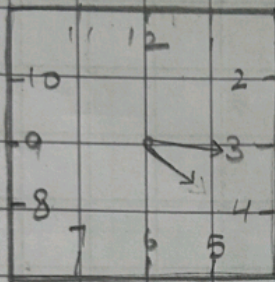


5:30

(15)

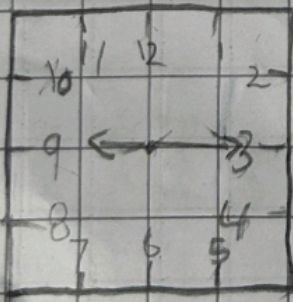
Q. Draw the clock hands Quarter past

1. Quarter past 4



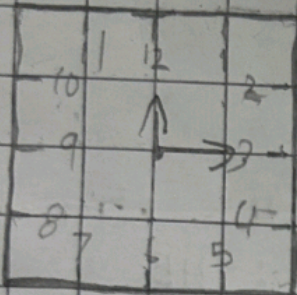
= 4 : 15

2. Quarter past 9



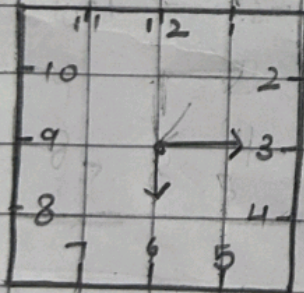
= 9 : 15

3. Quarter past 12



= 12:15

4. Quarter past 6



= 6:15


✨ STAR PLAY SCHOOL

Dear Parents

 Today's Assignment

 Maths- Time

 Home Assignment

 Maths- learn table of 5 to 12 (oral test tomorrow)
and do given questions in maths notebook

 The work must be neat and clean



DATE _____
HW _____

Time

Q1. Draw the clock hands (Quarter past, Quarter to & half past) and

a. Half past 2

b. Half past 10

c. Quarter past 11

d. Quarter past 8

e. Quarter to 4

f. Quarter to 7