

STAR PLAY SCHOOL

Dear Parents

Today's Assignment

 **MENTAL MATHS**

Work sheet done in class.

 **G.K.**

L-5 in book & copy also.

HOME CONNECTOR

 **GK**

Page no.7 & 9 do in book.

Paste /draw picture of animal's home in copy.

 **MATHS**

100 counting 101 to 200 in copy. 1:14 pm ✓✓

3.5.24

Mental Math. Weekly

Q.1- Which number comes after.

1) $99 = \underline{100}$

Q.2- $28 - 17 = \underline{11}$

Q.3- $5 - 2 = \underline{3}$

Q.4- $7 \div 4 = \underline{3}$

Q.5- How many circles are there?

$00000000 = \underline{8}$

Q.6- What number comes before 50?

Ans 49

Q.7- Complete the following series

246, 8, 10

Q.8- Double of 48

~~Q9 - 10 + 2 = 12~~

$$Q9 - 10 + 2 = 12$$

Q10 - Subtract 2 from 53

$$\begin{array}{r} 118 \\ 3 \overline{) 5124} \end{array}$$

Paste / draw the picture of animals

3/5/24



DATE Friday

PAGE _____ Ch

Animal's Home

Q1- Match the following animals with their homes.

Animal Its Home

- | | |
|---------------|-------------|
| 1) Horse | a) Kennel ✓ |
| 2) Rabbit | b) Hole ✓ |
| 3) Lion | c) Burrow ✓ |
| 4) dog | d) Nest ✓ |
| 5) Kingfisher | e) Stable ✓ |
| 6) Owl | f) Den ✓ |


NS 3/5/24



ACTIVITY 2: FIND THE WAY


HW 3/5/24

Help the caterpillar to reach the butterfly by following the numbers 21 to 30.



A. Tick (✓) the correct answer.

- I am a frog. I
a. slither b. hop
- I am a horse. I
a. trot b. crawl
- I am a fish. I
a. fly b. swim






B. Match the following.

Column A

- tallest animal
- fastest land animal
- a bird which cannot fly
- lion's home
- dog's home

Column B

- 
- 
- kennel
- 
- den

C. Fill in the blanks with information about yourself.

Name :

Age :

Address :

.....

.....

School :

.....