

Star Public School

Dear Parents'

Today's assignment

Maths - Chapter 3

E.V.S - Chapter 4 question answer

Home assignment

**E.V.S - Learn question answer of chapter
4**

Maths - Practice of subtraction

Edited 10:48 AM ✓✓


4

Clothes We Wear

Let's Learn About


- Need of Clothes
- Materials Used to Make Clothes
- Uniforms
- Types of Clothes
- Clothes for Special Occasions
- Costumes

Colour the given clothes. Unscramble the letters to name them.




SIKTR

SKIRT




TPO

TOP



SRHIT

SHIRT



FKROC

FROCK

We wear clothes to protect our body from heat, cold, rain, wind, dust and insects. They also make us look smart.

Let's learn about different types of clothes.

Learn More

Early men covered their body with leaves.



Quick Check

(Correct Choice)

A. Tick (✓) the correct answer.

- Clothes help us to cover our bodies.
 (a) Leaves (b) Petals (c) Clothes
- We wear cotton clothes in Summer.
 (a) winter (b) summer (c) rainy season
- We wear woollen clothes in winter.
 (a) woollen (b) cotton (c) silk
- Dancers and actors wear costumes while performing.
 (a) uniforms (b) costumes (c) sweaters

B. Fill in the blanks with the help of the given clues. (Words in Blanks)

- woollen (Cotton/Woolen) clothes keep us warm.
- We wear a raincoat (raincoat/coat) when it rains.
- We wear special (simple/special) clothes for occasions.
- Dancers wear costumes while dancing (cooking/dancing).

C. Write True (T) or False (F).

(True or False)

- We wear different clothes in different seasons.
- Raincoats keep us warm.
- Children wear uniforms to school.
- All clothes are made of the same material.

T
F
T
F

D. Answer the following questions.

(Write and Learn)

- Why do we wear clothes?
- Name any four clothes we wear in winter.
- What are uniforms?
- From where do we get wool?



Class - 1st



DATE _____

E.V.S
Chapter - 4.

Q1. Why do we wear clothes?

Ans. We wear clothes to protect us from heat, cold, rain, wind, dust and insects.

Q2. Name any four clothes we wear in winters

Ans: Sweaters

Jacket

Muffler

Cap

Q3. What are uniforms?

Ans: Uniforms are special clothes worn at work by people.

Q4. From where do we get wool?

Ans: We get wool from - rabbit, sheep and yak.

Let's Bring in Technology

Write subtraction facts of numbers 8 and 9 in MS Paint/Tux Paint. Take printout of your work and paste images of different objects to represent subtraction facts in your notebook.

Skills Covered: Applicative thinking, Digital-age literacy, Critical thinking

Crossword Time

Solve the subtraction sums. Write the number names of the difference in the crossword puzzle.

Across

4. $8 - 4 = 4$ Four

7. $5 - 4 = 1$ One

8. $9 - 0 = 9$ Nine

Down

1. $7 - 5 = 2$ Two

2. $6 - 6 = 0$ Zero

3. $9 - 2 = 7$ Seven

4. $8 - 3 = 5$ Five

5. $7 - 4 = 3$ Three

6. $8 - 2 = 6$ Six

1. T
w
o

2. z
e
r
o

3. s
e
v
e
n

4. f
i
v
e

5. t
h
r
e
e

6. s
i
x

7. o
n
e

8. n
i
n
e

Skills Covered: Applicative thinking, Observation, Critical thinking, Brainstorming

Quick Check

1. Subtract the given numbers by drawing the number line in your notebook.

$$(a) 7 - 4 = 3$$

$$(b) 8 - 6 = 2$$

$$(c) 4 - 1 = 3$$

$$(d) 6 - 5 = 1$$

2. Subtract the given numbers.

$$(a) 7 - 6 = 1$$

$$(b) 6 - 4 = 2$$

$$(c) 4 - 1 = 3$$

$$(d) 3 - 0 = 3$$

3. Find the difference.

$$\begin{array}{r} 9 \\ - 4 \\ \hline 5 \end{array}$$

$$\begin{array}{r} 8 \\ - 7 \\ \hline 1 \end{array}$$

$$\begin{array}{r} 5 \\ - 2 \\ \hline 3 \end{array}$$

$$\begin{array}{r} 4 \\ - 4 \\ \hline 0 \end{array}$$

4. Fill in the boxes with correct numbers.

$$(a) 8 - 1 = 7$$

$$(b) 3 - 0 = 3$$

$$(c) 9 - 9 = 0$$

$$(d) 4 - 3 = 1$$

5. Solve the following word problems.

(a) Rinki has to water 8 plants. She has watered 3 plants. How many plants are still left to be watered? $8 - 3 = 5$


(b) Aman and his 3 friends started a race. 2 of them dropped out. How many children reached the finishing line? $3 - 2 = 1$

Chapter - 3


Subtraction

Q1 - Subtract the given number by drawing the number line.


$$a) 7 - 4 = \boxed{3}$$



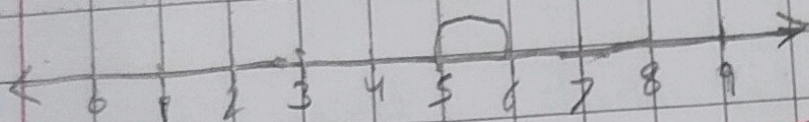
$$b) 8 - 6 = \boxed{2}$$



$$c) 4 - 1 = \boxed{3}$$



$$d) 6 - 5 = \boxed{1}$$



Q2 - Rinki has to water 8 plants. She has watered 3 plants. How many plants are still left to be watered?

Total plants to be watered = 8

Plants watered = 3

Plants to left to be watered $\boxed{5}$

0


$$\begin{array}{r} 8 \\ - 3 \\ \hline 5 \end{array}$$

Q3 - Anson and his 3 friends started

a race. 2 of them dropped out.

How many child reached the finish line.

$$\begin{array}{r} 3 \\ - 2 \\ \hline 1 \end{array}$$



✓

$$\frac{718}{24}$$