

STAR PUBLIC SCHOOL

Dear Parents,

Today's assignment (class 1st)

👉 **EVS - Chapter- 2 Question & Answers
in Notebook**

👉 **Maths - Chapter- 2 (Addition) Page
Number- 22 & 23**

👉 **Earth Day Function**

Home Assignment -

👉 **Maths- Lesson- 2 (Page Number 24 &
25) in Book**

👉 **Hindi - पाठ 3 इ की मात्रा वाले शब्द याद
करो**

3:28 pm ✓✓

22-04-25

DATE
PAGE

CW

L-2

1). Which Sense organ helps us to speak?

Ans Tongue

2. Which Sense organ helps us to ^{See} speak?

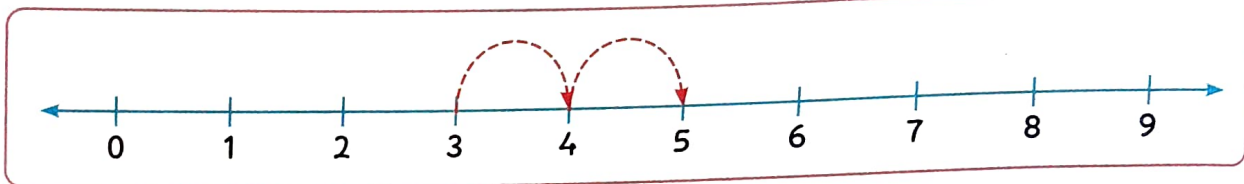
Ans Eyes

3) What do we need to grow and stay healthy?

Ans We need food and clean water.

22/04/25

Example: To add 3 and 2, start from 3 and count 2 steps forward. You will reach number 5.




So, $3 + 2 = 5$.

Apply

22.04.25 CW

1. Count and write the number of fingers in each part.




3 fingers plus 4 fingers equals fingers.



1 finger plus 3 fingers equals fingers.







5 fingers plus 3 fingers equals fingers.







2 fingers plus 6 fingers equals fingers.



2. Count and write the number of objects. Add the groups to find the sum.



(a)  +  =

(b)  +  =




(c)  +  =




(d)  +  =




(e)  +  =


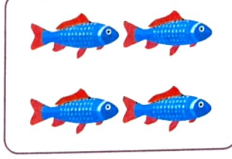

(f)  +  =




3. Check the addition and put (✓) if it is correct and (✗) if it is incorrect in the blank box.




(a)  +  = 

(b)  +  = 

(c)  +  = 

(d)  +  = 

(e)  +  = 

(f)  +  = 

4. Fill in the blank boxes.

(a) $7 + 2 = \square$

(b) $1 + \square = 8$

(c) $5 + \square = 8$

(d) $\square + 4 = 7$

(e) $4 + 4 = \square$

(f) $3 + \square = 6$

(g) $2 + \square = 7$


(h) $\square + 2 = 6$

5. Add the numbers on the number line.

(a) $7 + 1 = \square$



(b) $4 + 5 = \square$



HW

(c) $6 + 2 = \square$



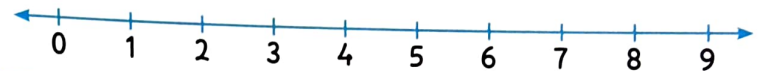
(d) $1 + 4 = \square$



(e) $3 + 6 = \square$



(f) $2 + 5 = \square$



Learn and Understand

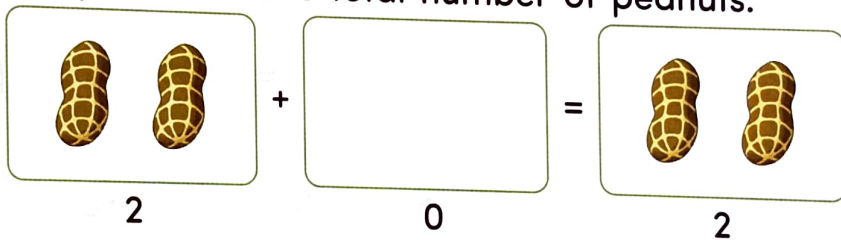
Adding Zero and One



Explore More

- Adding Zero and One
- Order in Addition
- Addition Facts

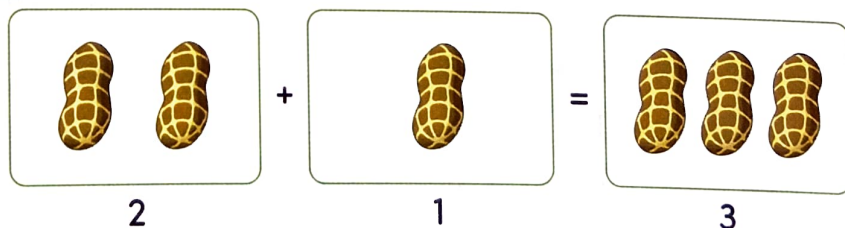
Mr Chessy, the squirrel has 0 peanuts. His friend, Tod gives him 2 peanuts. Let us help Mr Chessy to count the total number of peanuts.



Now, Mr Chessy has 2 peanuts. When we add 0 to a number, we get the same number.

Can you tell how many peanuts will Mr Chessy have if Tod gives him 1 more peanut?

Let us understand this.



When we add 1 to a number, we get the number that comes just after it.