

STAR PLAY SCHOOL

Dear parents,

Today's classwork assignment

👉 **MATHS BOOK**(fun with writing skills)

.Count and add (pg no-46 ,47)

👉 **Reading & Oral**

. Numbers name (one to ten)

👉 **RHYMES**

. an elephants  walk like this and that

Today's Homework assignment

👉 **MATHS BOOK**

.fun with writing skills (pg no. 48, 49)

👉 **MATHS LEARNING**


. Learn (1 to 100) counting
. Learn spelling of
1 to 10 number names
. English ed , eg sound words

6/9/24


Count the objects and add one more to the total.
Write the answer in the given box.

C.W

Date:



13 + 1 =


17 + 1 =




16 + 1 =




18 + 1 =

12 + 1 =




6/9/24

Add and write the total number of objects

H.W


Date:



+

=

2




+

=

5

2

3




+

=

10

1

3



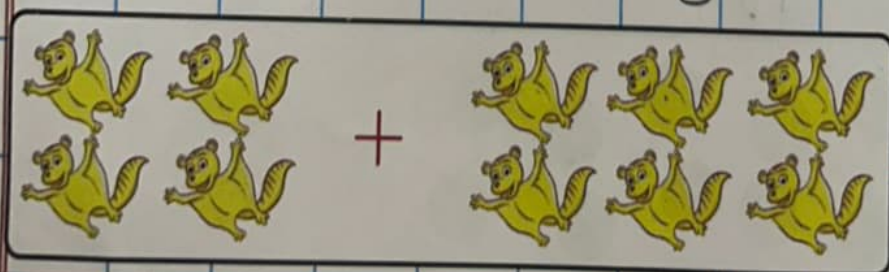
+

=

11

6

5



+

=

10

4

6

6/9/24

Add and write the total number of objects

H.W

Date:

A box containing 7 dogs on the left and 3 dogs on the right, separated by a plus sign. To the right of the box is an equals sign followed by a box containing the number 10. A cartoon boy is peeking over the top of the 10 box.

7

3

A box containing 10 teddy bears on the left and 4 teddy bears on the right, separated by a plus sign. To the right of the box is an equals sign followed by a box containing the number 14. A cartoon boy is peeking over the top of the 14 box.

10

4

A box containing 12 ducks on the left and 2 ducks on the right, separated by a plus sign. To the right of the box is an equals sign followed by a box containing the number 14. A cartoon boy is peeking over the top of the 14 box.

12

2

A box containing 14 wheelchairs on the left and 1 wheelchair on the right, separated by a plus sign. To the right of the box is an equals sign followed by a box containing the number 15. A cartoon boy is peeking over the top of the 15 box.

14

1

A box containing 17 crabs on the left and 3 crabs on the right, separated by a plus sign. To the right of the box is an equals sign followed by a box containing the number 20. A cartoon boy is peeking over the top of the 20 box.





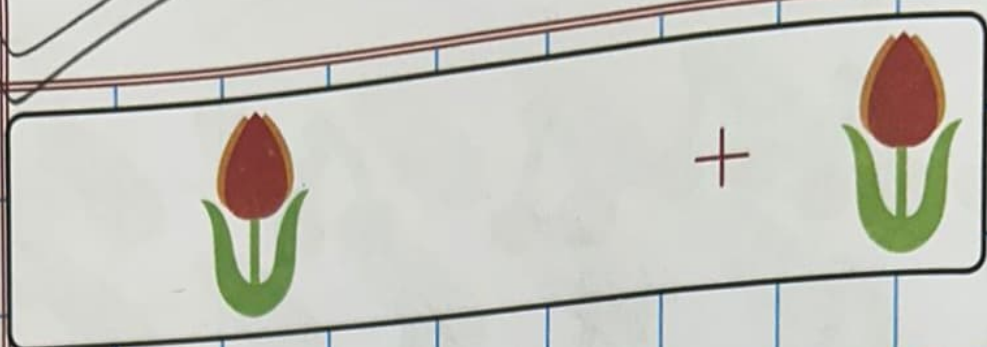
17

3

6/9/24
Count the objects and add one more to the total.
Write the answer in the given box.

Date:

C.W



Word Family Fun


Print the consonant sound to complete the words.

'eg' words

egg 

peg 

keg 

leg 

'ed' words

fed 

bed 

led 

red 

ted 

wed **Wednesday**

- peg : a wooden pin pushed or driven into a surface
- keg : small barrel
- led : light - emitting diode
- fed : give food to someone



AN ELEPHANT WALKS LIKE THIS AND THAT

An elephant walks like this and that,
He's terribly tall and he's terribly fat.
He's got no fingers,
He's got no toes.
But goodness gracious,
What a long, long nose!

